



Exploring the World of Science



Chemistry Lab

MIT Science Olympiad Invitational

January 24th, 2015

Team Name: _____

Team Number: _____

Team Members: _____

Score: _____ Rank: _____

Time: ~50 Minutes. A 5 minute warning will be given.

Do not open the test until instructed to begin.

A periodic table and all relevant constants are included in the back.

Show all work necessary to receive credit.

Do not forget units!

If you plan on taking the pages of the test apart, make sure to label each page with your team number and restaple all the pages together (in order) before turning it in.

Team Number: _____

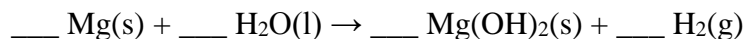
Team Number: _____

PROBLEM 1

10% of total

TOTAL	A	B	C	D	E	F
16	2	2	3	3	4	2

A strip of magnesium ribbon is dropped into hot water, and the following reaction takes place:



- Balance the reaction by filling in the coefficients, using lowest whole numbers.
- Why must the magnesium ribbon be dropped into hot water to induce a reaction?
- After a period of time, the reaction slows and the evolution of bubbles ceases. Explain these observations. Hint: Think about solubility.
- Assuming that the magnesium reacts completely with the water, calculate the mass of H_2 formed when 0.420g of magnesium ribbon is introduced.

Mass of H_2 =

- The hydrogen gas evolved is captured and combusted with 0.250g of oxygen. If 0.230g of water are produced, find the limiting reagent and calculate the % yield of water.

Limiting Reagent:

% Yield =

- When magnesium is reacted with hot steam, it reacts with it in a 1:1 ratio to form two products. Write the equation of the balanced reaction.

Balanced Equation:

Team Number: _____

PROBLEM 2

11% of total

TOTAL	A	B	C	D	E	F
18	5	3	2	2	4	2

An unknown metal X from the Group 1 elements (alkali metals) burns in a pure oxygen environment with an intense red flame to form a white compound.

a. Write the product of combustion (the metal oxide) that predominates for each the alkali metals, from lithium to cesium.

Li:

Rb:

Na:

Cs:

K:

b. Assuming that 0.200g of the unknown metal X forms 0.431g of the oxide, identify X.

Identity of X:

c. When X is burned in atmospheric air, the metal oxide is not the exclusive product. The metal also reacts with nitrogen to form a metal nitride product. Write down the balanced equation of this nitrogen reaction (use X in place of the metal if you could not determine its identity).

Balanced Equation:

d. The metal nitride reacts with water to form a gaseous product. Identify this gas.

Identity of Gas:

e. 0.300g of metal X are burned in atmospheric air to form 0.600g of a mixture of the metal oxide and nitride. Find the mass of each product formed.

Mass of Metal Oxide =

Mass of Metal Nitride =

f. Metal X is treated with hydrogen gas to form an ionic compound. Identify this ionic compound.

Identity of X:

Team Number: _____

PROBLEM 3

11% of total

TOTAL	A	B	C	D	E	F	G	H
18	2	2	2	2	2	4	2	2

Write down the net ionic equation for each question below (*does not need to be balanced*). Also classify the reactions as being combustion, acid-base, organic, decomposition, combination, precipitation, nuclear, oxidation-reduction, or complex-ion formation. Multiple reaction types may apply, but you need only write one.

- Solutions of sodium iodide and lead nitrate are mixed.
- Carbon dioxide is bubbled through a solution of calcium hydroxide.
- A solution of hydrofluoric acid is added to a suspension of aluminum hydroxide.
- Phosphorus is burned in excess oxygen.
- Uranium-238 undergoes alpha decay.
- $\text{YBa}_2\text{Cu}_3\text{O}_7$ is dissolved in aqueous HCl with excess KI in an oxygen-free atmosphere.
- Concentrated hydrochloric acid is added to a solution of cobalt(II) chloride and heated.
- Acetic acid is heated with ethanol in the presence of H^+

Team Number: _____

PROBLEM 4

7% of total

TOTAL	A	B	C	D	E
12	3	3	2	2	2

Breathalyzers make an estimate of blood alcohol by measuring the amount of alcohol in a person's breath. Old breathalyzer models functioned by having a person breath through a solution of potassium dichromate, which oxidizes the ethanol in the person's breath into acetic acid. The dichromate changes color in the process, which is measured by a detector.

a. Balance each of the equations below for the oxidation of ethanol and reduction of dichromate.



b. Combine the two equations to write a net ionic equation.

Equation:

The concentration of ethanol in the person's blood to ethanol in the person's breath is on average 2100. Thus, this is the standard most machines are calibrated to. The current legal limit on driving in the United States is 0.08g ethanol per 1000cm³ of blood.

c. If a person at the limit exhales 1L of breath, how many moles of ethanol are breathed out?

Moles of Ethanol =

d. If 14% of the dichromate molecules in the breathalyzer have reacted, how many molecules of dichromate does the breathalyzer in total contain?

Molecules of Dichromate =

e. A person's ratio of ethanol in blood to ethanol in breath is 2300. The BAC reported by the breathalyzer will be: *Circle the correct choice*

Higher than the real BAC

Lower than the real BAC

Team Number: _____

PROBLEM 5

11% of total

TOTAL	A	B	C	D	E	F	G
18	2	2	3	3	4	2	2

Consider the following reaction:



a. If N_2O_5 is disappearing at a rate of $0.20 \text{ mol/L}\cdot\text{sec}$, what is the rate of appearance of O_2 ?

Rate of Appearance =

b. Given that the decomposition of N_2O_5 is found to be first order, what happens to the reaction rate if $[\text{N}_2\text{O}_5]$ is tripled?

c. The rate constant has been determined to be $3.20 \times 10^{-2} \text{ s}^{-1}$ at 273K and $5.50 \times 10^{-2} \text{ s}^{-1}$ at 298K. Find the half-life of N_2O_5 at 298K in seconds.

Half Life =

d. For a sample of N_2O_5 with an initial concentration of 0.340 mol/L , calculate the concentration of N_2O_5 after 60 seconds at 298K.

$[\text{N}_2\text{O}_5]$ =

e. Calculate the activation energy of the reaction (answer in J or kJ)

Activation Energy =

f. What will be the concentration of $[\text{N}_2\text{O}_5]$ after 6 half-lives? ($[\text{N}_2\text{O}_5]_0 = 0.340 \text{ mol/L}$).

$[\text{N}_2\text{O}_5]$ =

g. Which of the following graphs give a straight line? *Circle the correct choice*

$[\text{N}_2\text{O}_5]$ vs. time

$\ln [\text{N}_2\text{O}_5]$ vs. time

$1/[\text{N}_2\text{O}_5]$ vs. time

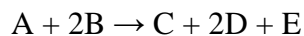
Team Number: _____

PROBLEM 6

10% of total

TOTAL	A	B	C	D
16	8	2	4	2

The reaction order of the following reaction is under investigation:



A series of initial rates were determined in a set of experiments below:

[A] _o (mol/L)	[B] _o (mol/L)	[C] _o (mol/L)	[D] _o (mol/L)	Initial Reaction Rate (mol/L·sec)
0.20	0.30	0.10	0.20	0.01
0.30	0.30	0.10	0.20	0.015
0.20	0.60	0.20	0.20	0.01
0.30	0.30	0.20	0.20	0.0075
0.20	0.60	0.20	0.30	0.01

a. Determine the reaction order with respect to [A], [B], [C], and [D].

$$A = \quad B = \quad C = \quad D =$$

b. Write the overall experimental rate equation.

$$\text{Rate} =$$

c. Calculate the value of k_{exp} (include its units).

$$k_{\text{exp}} =$$

d. The reaction occurs in solution, with water taking part as a first-order catalyst. Therefore, k_{exp} can be rewritten as $k_{\text{exp}} = k_{\text{actual}} \cdot [\text{H}_2\text{O}]$. Assuming that the solution is dilute, calculate k_{actual}

$$k_{\text{actual}} =$$

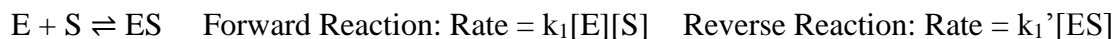
Team Number: _____

PROBLEM 7

7% of total

TOTAL	A	B	C	D
12	3	3	3	3

In biochemistry, the Michaelis-Menten mechanism models the kinetics of enzymes. An enzyme E and its substrate S initially combine to form the enzyme-substrate complex ES. ES can either then separate into E and S (the original reactants), or undergo a reaction to reform the enzyme and product P.



When the overall reaction rate is calculated, the rate of formation of product is $\frac{k_2[E]_o[S]}{K_M + [S]}$

Where K_M is the Michaelis constant, $K_M = (k_1' + k_2)/k_1$

a. The reaction rate equation simplifies itself in the presence of limiting cases. Write down the rate law when [S] is extremely high.

Rate =

b. The rate law calculated above represents the maximum reaction rate, denoted V_{\max} , when all of the enzyme is bound to substrate. Find the value of K_M when the reaction rate is half of its maximum rate, or $\frac{1}{2}V_{\max}$. Express in terms of $[E]_o$ and [S] – you may only need to use one.

$K_M =$

c. Find the reaction order with respect to $[E]_o$ and [S], when [S] is set to an extremely low concentration.

$[E]_o =$

$[S] =$

d. A competitive inhibitor can be added to an enzyme-substrate mix, where the inhibitor competes with the substrate for access to the enzyme. This effectively results in decreased reaction rates at identical substrate concentrations. In this case, how would you expect the values of V_{\max} and K_M to change? Answer with decrease, stay the same, or increase

$V_{\max} =$

$K_M =$

Team Number: _____

PROBLEM 8

33% of total

TOTAL	#1	#2	#3	#4	#5	#6	#7
56	8	8	8	8	8	8	8

On your bench, you have been given seven pipets that contain solutions of AgNO_3 , BaCl_2 , $\text{Cu}(\text{NO}_3)_2$, CuSO_4 , $\text{Pb}(\text{NO}_3)_2$, KI , and $\text{Na}_2\text{S}_2\text{O}_3$ labeled 1-7 (though not necessarily in that order). Carry out an experiment to determine the contents of each pipet. **No refills will be given.**

To receive credit, you must construct a data table and/or provide detailed observations that you can use to draw conclusions of each unknown solution. Make sure to justify each choice.

#1	#2	#3	#4
#5	#6	#7	

Team Number: _____

$$N_A = 6.022 \times 10^{23} \text{ mol}^{-1}$$

$$1 \text{ amu} = 1.661 \times 10^{-27} \text{ kg}$$

$$R = 8.314 \text{ J mol}^{-1} \text{ K}^{-1} = 0.08206 \text{ L atm K}^{-1} \text{ mol}^{-1}$$

$$c = 299\,792\,458 \text{ m/s}$$

PERIODIC TABLE OF THE ELEMENTS

1																	18
1A																	8A
1 H 1.008	2 He 4.003																
3 Li 6.941	4 Be 9.012											5 B 10.81	6 C 12.01	7 N 14.01	8 O 16.00	9 F 19.00	10 Ne 20.18
11 Na 22.99	12 Mg 24.31	3 3B	4 4B	5 5B	6 6B	7 7B	8 8B	9 8B	10 8B	11 1B	12 2B	13 Al 26.98	14 Si 28.09	15 P 30.97	16 S 32.07	17 Cl 35.45	18 Ar 39.95
19 K 39.10	20 Ca 40.08	21 Sc 44.96	22 Ti 47.88	23 V 50.94	24 Cr 52.00	25 Mn 54.94	26 Fe 55.85	27 Co 58.93	28 Ni 58.69	29 Cu 63.55	30 Zn 65.39	31 Ga 69.72	32 Ge 72.61	33 As 74.92	34 Se 78.96	35 Br 79.90	36 Kr 83.80
37 Rb 85.47	38 Sr 87.62	39 Y 88.91	40 Zr 91.22	41 Nb 92.91	42 Mo 95.94	43 Tc (98)	44 Ru 101.1	45 Rh 102.9	46 Pd 106.4	47 Ag 107.9	48 Cd 112.4	49 In 114.8	50 Sn 118.7	51 Sb 121.8	52 Te 127.6	53 I 126.9	54 Xe 131.3
55 Cs 132.9	56 Ba 137.3	57 La 138.9	72 Hf 178.5	73 Ta 180.9	74 W 183.8	75 Re 186.2	76 Os 190.2	77 Ir 192.2	78 Pt 195.1	79 Au 197.0	80 Hg 200.6	81 Tl 204.4	82 Pb 207.2	83 Bi 209.0	84 Po (209)	85 At (210)	86 Rn (222)
87 Fr (223)	88 Ra (226)	89 Ac (227)	104 Rf (261)	105 Db (262)	106 Sg (263)	107 Bh (262)	108 Hs (265)	109 Mt (266)	110 Ds (281)	111 Rg (272)	112 Cn (285)	113 (Uut) (284)	114 (Uuq) (289)	115 (Uup) (288)	116 (Uuh) (293)	117 (Uus) (294)	118 (Uuo) (294)
58 Ce 140.1	59 Pr 140.9	60 Nd 144.2	61 Pm (145)	62 Sm 150.4	63 Eu 152.0	64 Gd 157.3	65 Tb 158.9	66 Dy 162.5	67 Ho 164.9	68 Er 167.3	69 Tm 168.9	70 Yb 173.0	71 Lu 175.0				
90 Th 232.0	91 Pa 231.0	92 U 238.0	93 Np (237)	94 Pu (244)	95 Am (243)	96 Cm (247)	97 Bk (247)	98 Cf (251)	99 Es (252)	100 Fm (257)	101 Md (258)	102 No (259)	103 Lr (262)				