




Directions: Classify these galaxies according to the information provided in the descriptions in this lesson. Use the letters as recorded in Hubble's Tuning Fork. Examples: Sc, SBa, E2, etc.






Galaxy type: _____

Galaxy type: _____

Galaxy type: _____

Galaxy type: _____






Galaxy type: _____

Galaxy type: _____

Galaxy type: _____

Galaxy type: _____

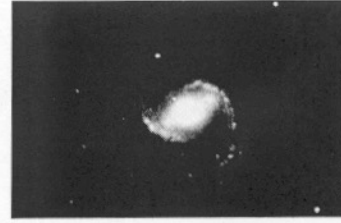



Galaxy type: _____

Galaxy type: _____

Galaxy type: _____

Galaxy type: _____





Galaxy type: _____

Galaxy type: _____

Galaxy type: _____

Galaxy type: _____



Galaxy type: _____

Galaxy type: _____

Galaxy type: _____

Galaxy type: _____